



Where all the students get equal opportunity to show their brilliance and win amazing prizes!



**RPS OLYMPIAD-2022**

**GRADE-III**

**M.M. : 60****Time : 60 Mins.****English (15 Marks)**

**Q.1 Choose the correct option for the jumbled words given below:**

**coffee/cup/drank/a/ of/Mary**

- a) cup coffee Mary drank of a.
- b) coffee Mary drank a cup of.
- c) Mary drank a cup of coffee.
- d) Mary cup of coffee drank a.

**Q.2 Which of the following nouns is a common gender?**

- a) mother
- b) baby
- c) boy
- d) horse

**Q.3 The feminine gender of 'host' is \_\_\_\_\_.**

- a) guest
- b) mistress
- c) maid
- d) hostess

**Q.4 Pick the correct preposition and complete the following sentence.**

**Her expenses are \_\_\_\_\_ her means.**

- a) at
- b) into
- c) above
- d) after

**Q.5 Replace the underlined words with the correct pronoun in the sentence given below.**

**Johanna and her friends will learn German language.**

- a) She
- b) They
- c) we
- d) You

**Q.6 Pick articles to complete the sentence given below.**

**How far is \_\_\_\_\_ Sun from \_\_\_\_\_ Earth?**

- a) a/the
- b) the/the
- c) an/ the
- d) the/ a

**Q.7 Choose a suitable adjective to complete the sentence.**

**Zebras have \_\_\_\_\_ skin.**

- a) striped
- b) spotted
- c) brown
- d) grey

**Q.8 Pick the superlative degree from the given options:**

- a) heavy
- b) heavier
- c) heaviest
- d) more heavy

**Q.9 Pick the proper noun from the options mentioned below:**

- a) pen
- b) The Hindu
- c) childhood
- d) table

**Q.10 Find the kind of noun for the underlined word:**

**He is a wonderful player.**

- a)proper
- b) common
- c) abstract
- d) collective

**Q.11 Choose the correct preposition to complete the sentence given below.**

**He reached the station \_\_\_\_\_ bus.**

- a)from
- b)through
- c) by
- d) into

**Q.12 Fill in the blank with the correct article.**

**My brother is \_\_\_\_\_ honest man.**

- a) a
- b) an
- c) the
- d) no article

**Q. 13 Fill in the blank with an appropriate conjunction.**

**Listen to the story \_\_\_\_\_ answer the questions in complete sentences.**

- a) and
- b) but
- c) because
- d) for

**Q.14 Fill in the blank with the correct pronoun.**

**My grandparents live in Mumbai. \_\_\_\_\_ often visit us.**

- a) They
- b) It
- c) He
- d) She

**Q.15 Choose the correct option for the jumbled words given below:**

**Rajpath/ my/ lived/ uncle/ just/ across**

- a) Rajpath just lived across my uncle.
- b) Across lived just my uncle Rajpath.
- c) My uncle lived just across Rajpath.
- d) My Rajpath lived across just uncle.

<b><u>MATHEMATICS (15 Marks)</u></b>
--------------------------------------

**Q.16 Mr. Tarun bought 6 tins of paint, each containing 9L of paint. There was 3L of paint left after painting his house. How much paint was used to paint the house?**

- A) 52 L
- B) 51 L
- C) 53 L
- D) 57 L

- Q.17** Sheena puts fruit slices on a tray. She puts 40 apple slices on a tray. She puts 12 pear slices fewer than the apple slices on the tray. What is the number of pear slices on the tray?
- A) 12  
B) 52  
C) 28  
D) 40
- Q.18** Johnny bought 180 stickers. He bought  $\frac{4}{9}$  of the total stickers of Pokémon and remaining stickers were of Spiderman. How many stickers of Spiderman has he bought?
- A) 100  
B) 80  
C) 180  
D) 200
- Q.19** Quotient is 564 and divisor is 7. Find the dividend if remainder is zero.
- A) 6757  
B) 4756  
C) 3948  
D) 4050
- Q.20**  $3412 \text{ m} + 4588 \text{ m} = \underline{\hspace{2cm}}$
- A) 6 Km  
B) 7 Km  
C) 8 Km  
D) 9 Km
- Q.21** Ralph and Sammi planned to meet every Saturday. If today's date is 5th August, then how many Saturdays will they meet after today in the month of August?
- A) 2  
B) 3  
C) 4  
D) 1
- Q.22** Rita has 12 rupees 60 paise to buy a notebook. The cost of each notebook is 9 rupees 50 paise. How much change should she get back?
- A) 3100 paise  
B) 310 paise  
C) 300 paise  
D) 3010 paise

**Q.23** Complete the given pattern:

1,2,4,7,11, \_\_\_\_\_, \_\_\_\_\_

- A) 15,21
- B) 16,22
- C) 14,18
- D) 20,25

**Q.24** \_\_\_\_\_ is 100 minutes before 7 p.m. and \_\_\_\_\_ hours after 11:20 a.m.

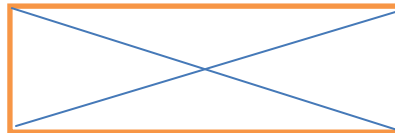
- A) 4:20 p.m., 6 hours
- B) 5:20 p.m. , 6 hours
- C) 5:20 p.m. , 5 hours
- D) 5:20 p.m. , 4 hours

**Q.25** Successor of the number which is 24 before 123 is \_\_\_\_\_.

- A) 98
- B) 99
- C) 100
- D) 101

**Q.26** How many triangles are there in the figure given below?

- A) 3
- B) 8
- C) 10
- D) 4



**Q.27** When zero is not one of the addends, the sum is \_\_\_\_\_ each of the addend.

- A) equal to
- B) lesser than
- C) greater than
- D) zero






**Q.28** Which one of the following is not an equivalent fraction of  $\frac{3}{12}$ ?

- A)  $\frac{6}{24}$
- B)  $\frac{7}{16}$
- C)  $\frac{9}{36}$
- D)  $\frac{30}{120}$

**Q.29** How many times 5 can be taken away from 46655?

- A) 9331
- B) 9252
- C) 9254
- D) 9000

**Q.30** The given pictograph shows the mode of transport used by the students of Grade III.

Mode of Transport	Number of Students
Bus	
Car	
Walking	
Bicycle	
Key:  Represents 4 children	

**How many students used car as the mode of transport?**

- A)12
- B) 3
- C)16
- D) 24

**EVS (15 Marks)**

**Q.31** Who builds a house?

- A) architect
- B) mason
- C) carpenter
- D) potter

**Q.32** Who is the primary consumer in the given food chain?

Sun → grass → rabbit → eagle

- A) grass
- B) sun
- C) eagle
- D) rabbit

**Q.33** LPG Stands For \_\_\_\_\_.

- A)Liquid Propylene Gas
- B) Liquefied Petrol Gas
- C) Liquefied Petroleum Gas
- D) None of these

**Q.34 Which gas is present in maximum amount in air?**

- A) Oxygen
- B) Nitrogen
- C) Carbon dioxide
- D) Helium

**Q.35 The organisms that breakdown dead plants and animals are called \_\_\_\_\_.**

- A) decomposers
- B) producers
- C) consumers
- D) directors

**Q.36 Which of the following is not a traditional game?**

- A) Kite flying
- B) Marbles
- C) Hopscotch
- D) Video game

**Q.37 Uttar Pradesh is famous for \_\_\_\_\_.**

- A) Phulkari
- B) Chikankari
- C) Ikat
- D) Tie & Dye

**Q.38 Identify the correct food chain: -**

- A) Sun → Grass → Goat → Lion → Decomposer
- B) Grass → Sun → Goat → Lion → Decomposer
- C) Lion → Decomposer → Goat → Sun → Grass
- D) Sun → Grass → Decomposer → Lion → Goat

**Q.39 Which of the food items can be cooked by boiling?**

- A) rice
- B) bread
- C) samosa
- D) puri

**Q.40 What percentage of water is present in the seas and oceans?**

- A) 85 %
- B) 80%
- C) 90 %



D) 97%

**Q.41 Which of the following is an example of condensation?**

- A) dew on grass
- B) drying of clothes
- C) formation of ice
- D) boiling of water

**Q.42 When children below the age of \_\_\_\_\_ are made to work, it is called as child labour.**

- A) 10
- B) 18
- C) 23
- D) 14

**Q.43 Which organs of a fish help it to change directions while swimming in water?**

- A) fins and tail
- B) legs and hands
- C) wings & feathers
- D) lungs & gills

**Q.44 Boxing is played \_\_\_\_\_.**

- A) in the ring
- B) on the pitch
- C) in a pool
- D) on the table

**Q.45 Which group contains the primary colours?**

- A) Black, White, Orange
- B) Red, Blue, Yellow
- C) Pink, Maroon, Green
- D) Black, Green, Orange

**GK (15 Marks)**

**Q.46 Hyderabad is the capital of which of the following two states?**

- A) Andhra Pradesh, Tamil Nādu
- B) Telangana, Kerala
- C) Andhra Pradesh, Karnataka
- D) Telangana, Andhra Pradesh

**Q.47 Which of the following statement/s is/are correct?**

- i. Chandigarh is the capital of both Punjab and Haryana.
- ii. Rajasthan is the largest state of India.
- iii. Uttar Pradesh is the most populous state of India.
- iv. Kerala has the highest literacy rate in India.

Choose the correct option:

- A) Only i
- B) Both (i) and (iv)
- C) Both (ii) and (iii)
- D) All of the above

**Q.48 Select the correct order of the planets according to its size. (small to big)**

- I. Mercury
- II. Mars
- III. Venus
- IV. Earth

Code:

- A) IV, III, II, I
- B) I, III, II, IV
- C) I, II, III, IV
- D) IV, I, III, II

**Q.49** Neptune is called as the ‘ \_\_\_\_\_’planet of our solar system.

- A) Red
- B) Hot
- C) Windy
- D) Smallest

**Q.50** Why was the Great Wall of China built?

- A) As a means of defence
- B) To be a tourist attraction
- C) To use up left-over bricks
- D) All of these

**Q.51** In which country is the Machu Picchu located?

- A) Peru
- B) Spain
- C) Uruguay
- D) Rome

**Q.52** Which among the following is a folk dance of Assam?

- A) Manipuri
- B) Bihu
- C) Kathakali
- D) Bharatanatyam

**Q.53** Phag is the folk-dance form of which Indian state?

- A) Rajasthan
- B) Uttar Pradesh
- C) Madhya Pradesh
- D) Haryana

**Q.54** Which of the following is the currency of United Kingdom?

- A) Yen
- B) Pound Sterling
- C) Dollar

D) Rupee

**Q.55 What is the currency of Iran?**

A) Renminbi

B) Rial

C) Rouble

D) Dinar

**Q.56 Who invented the lift?**

A) Galileo

B) Waterman

C) Wright Brothers

D) Elisha Graves Otis

**Q.57 The smallpox vaccine was invented by \_\_\_\_\_.**

A) Edward Jenner

B) Alexander Fleming

C) William Harvey

D) Louis Pasteur

**Q.58 Which cricketer got Major Dhyan Chand Khel Ratna Award in 2021?**

A) Rohit Sharma

B) Mithali Raj

C) Rahul Dravid

D) None of these

**Q.59 Who has won the 2021 Miss Universe crown?**

A) Aishwarya Rai

B) Lara Dutta

C) Sushmita Sen

D) Harnaaz Sandhu

**Q.60 Who has become the first IAS officer to win a Paralympic medal?**

A) Neeraj Chopra

B) Mirabai Chanu

C) Suhas Yathiraj

D) Bajrang Punia