



Where all the students get equal opportunity to show their brilliance and win amazing prizes!



## OFFLINE EXAMINATION (PHASE –II)

CLASS-V

M.M. 60

TIME: 60 Minutes

Name : \_\_\_\_\_ Regn. No \_\_\_\_\_ Mobile No. \_\_\_\_\_

### General Instructions:-

1. Duration of the examination is 60 Minutes. Question Paper contains 60 questions with maximum 60 marks.
2. **There will be negative marking in Phase -II i.e:  $\frac{1}{4}$  mark will be deducted for each incorrect answer.**
3. Use of gadgets is not allowed.
4. Students must abide by the instructions issued during the examination by the invigilator or the centre incharge.
5. Before attempting the question paper ensure that it contains all pages & no question is missing.
6. Immediately fill the particulars on this page of the test booklet with blue/black ball point pen. Use of pencil is strictly prohibited.
7. Darken the bubbles completely. Do not put a tick  or a cross . Fill the bubbles completely.
8. Half –filled or over-filled bubbles will not be read by the software & liable to be rejected.

Correct Method



Student's Signature

Wrong Method



Invigilator's Signature



# ALL INDIA RPS OLYMPIAD-2022

(Organized by RPS Education Society Mahendergarh-Haryana)

M.M. 60

Class -V

Time: 60 Minutes

## ENGLISH (15 Marks)

**Q1. Choose the correct kind of noun for the underlined word:**

He is above meanness and deceit.

- A) Abstract                      B) Collective                      C) Material                      D) Common

**Q2. Choose the appropriate option to complete the sentence.**

A \_\_\_\_\_ of boats was sailing across the Ganga river.

- A) farrow                      B) flotilla                      C) band                      D) convoy

**Q3. Identify the kind of pronoun for the underlined word:-**

You are the man whom I wanted to meet.

- A) Demonstrative                      B) Possessive                      C) Reflexive                      D) Relative

**Q4. The teacher teaches us English. Here 'teaches is a/an'.**

- A) Transitive verb                      B) Pronoun                      C) Intransitive verb                      D) Adverb

**Q5. Identify the correct tense for the following sentence:-**

I have called him again.

- A) Simple Past                      B) Past Continuous                      C) Simple Future                      D) Present Perfect Tense

**Q6. He looks sad. Here the word 'looks' is a/an.**

- A) Action verb                      B) Modal verb                      C) Linking verb                      D) Both A and B

**Q7. Choose the correct option:-**

I got a gift \_\_\_\_\_ my aunt. \_\_\_\_\_ was a beautiful watch.

- A) of, These                      B) from, It                      C) for ,Which                      D) to, For

**Q8. Rearrange the letters to form a meaningful word:-**

IETNCFISUF

- A) CIENTUSE                      B) SUFFICIENT                      C) SUFICIENT                      D) SIUFFICIENT

**Q9. Choose correct option to for the following sentences of a story:-**

1. A stag felt very thirsty.
2. It was a hot summer day.
3. He went to a pool.
4. He looked into the water.

- A) 3124                      B) 3421                      C) 2134                      D) 4123



**Q20.** There are three numbers. The first number is the successor of the second number. The second number is the 3<sup>rd</sup> multiple of the third number and if the third number is the 8<sup>th</sup> multiple of 752, find the first number.

- A) 18047                                      B) 18048                                      C) 18050                                      D) 18049

**Q21** P is the least common multiple of 45 and 50. What is the value of 10 P + 100 ?

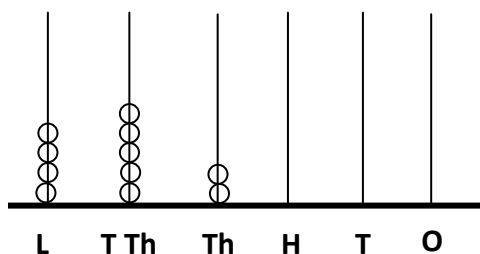
- A) 4600                                      B) 4500                                      C) 4400                                      D) 1000

**Q22.** Match the following:

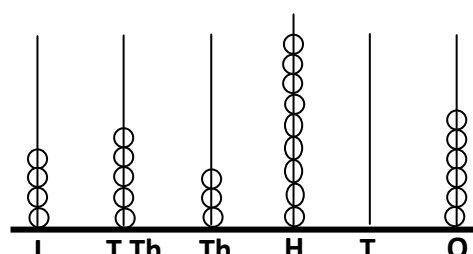
List – I		List – II	
A.	$4 \times 8623 \times 0$	1.	$690 + 10.5$
B.	$4236 \div 1$	2.	0.05
C.	$(689 + 2) + 9.5$	3.	0
D.	$20 \times 0.0025$	4.	4236

- |    |   |   |   |   |
|----|---|---|---|---|
|    | A | B | C | D |
| A) | 4 | 3 | 2 | 1 |
| B) | 3 | 4 | 2 | 1 |
| C) | 4 | 3 | 1 | 2 |
| D) | 3 | 4 | 1 | 2 |

**Q23.** On the basis of the given abacuses, state which of the following options is true?



(Picture –P)



(Picture –Q)

- A)  $P < Q$                                       B)  $P = Q$                                       C)  $P > Q$                                       D) None of these

**Q24.** Match the following:

List – I		List – II	
A.	Area of rectangle	1.	side $\times$ side
B.	Perimeter of square	2.	Sum of the length of three sides
C.	Area of square	3.	$4 \times$ side
D.	Perimeter of triangle	4.	Length $\times$ breadth

- |    |   |   |   |   |
|----|---|---|---|---|
|    | A | B | C | D |
| A) | 2 | 4 | 3 | 1 |
| B) | 3 | 4 | 1 | 2 |
| C) | 4 | 3 | 2 | 1 |
| D) | 4 | 3 | 1 | 2 |

Q25. The clock shows the time in the morning. Angle X represents \_\_\_\_\_ angle.



- A) Acute                      B) Obtuse                      C) Straight                      D) Reflex

Q26. When X is added to 59 hundreds, the answer is 300 tens more than 11 thousands. How many tens are there in X?

- A) 180                      B) 140                      C) 8100                      D) 810

Q27. If we divide the sum of 45 and 90 by their difference the answer is \_\_\_\_\_.

- A) neither prime nor composite                      B) the least prime number  
C) the least odd prime number                      D) the least composite number

Q28. How many stamps each measuring 2 cm × 1.5 cm can be pasted on a sheet of paper 12cm×6 m?

- A) 2400                      B) 2000                      C) 2500                      D) 2200

Q29. How many one –tenths make  $3\frac{3}{5}$ ?

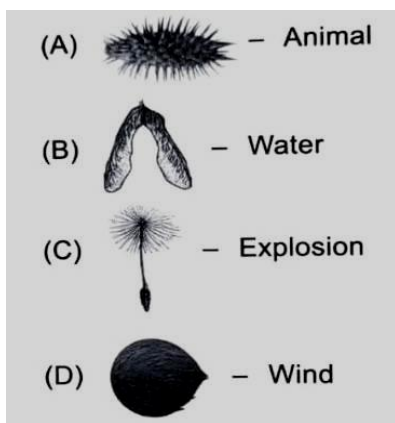
- A) 6                      B) 26                      C) 36                      D) 16

Q30. Find the decimal number for “Twenty Three - Fiftieths”.

- A) 0.23                      B) 0.46                      C) 2.3                      D) 4.6

**EVS (15 Marks)**

Q31. Which of the following shows the correct match of seed and its mode of dispersal?



Q32. Swati lives in a hostel and has 6 roommates out of them four fell ill. Which of them can pass on the infection to swati?

- A) Roshni who has anemia  
B) Ritika who has cold  
C) Sakshi who has scurvy  
D) Neha who develops a dust allergy

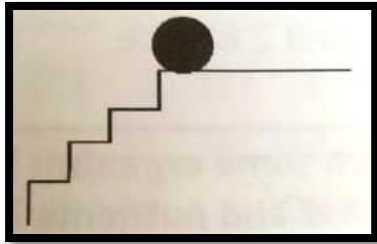
**Q33. After an accident, a person lost his speech and memory. Which part of his brain was affected?**

- A) Medulla oblongata      B) Cerebrum      C) Spinal cord      D) Cerebellum

**Q34. Who led the 1857 Revolt in Bihar?**

- A) Mangal Pandey      B) Kunwar Singh      C) Mir Qasim      D) Bhagat Singh

**Q35. Which of the following types of energy is stored in the ball given in the picture below?**



- A) Kinetic      B) Potential      C) Static      D) Wind

**Q36. Who was the founder of Arya Samaj?**

- A) Ramabai Ranade      B) Bhimroo Ambedkar  
C) Dayanand Saraswati      D) Rabindranath Tagore

**Q37. Which layer of the atmosphere has the highest density of gas molecules?**

- A) Exosphere      B) Mesosphere      C) Stratosphere      D) Troposphere

**Q38. Which was the first metal discovered by human ?**

- A) Iron      B) Mica      C) Aluminium      D) Copper

**Q39. Which of these machines work on the same principle as does the see – saw?**

- A) P and Q  
B) Q and R  
C) P and R  
D) R and S



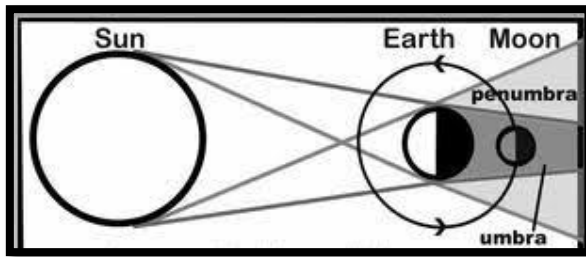
**Q40. River Yamuna joins the Ganga at \_\_\_\_\_.**

- A) Prayagraj      B) Varanasi      C) Kanpur      D) Jammu and Kashmir

**Q41. Select the plant pair that shows similar mode of vegetative reproduction.**

- A) Ginger, Radish      B) Coconut, Beetroot  
C) Rose, Carrot      D) Sweet potato, Dahalia

Q42. Which phenomenon is shown by the figure given below?



- A) Total Solar eclipse  
B) Lunar eclipse  
C) Partial solar eclipse  
D) Image formation

Q43. Which is the smallest Union Territory of India?

- A) Daman & Diu    B) Chandigarh    C) Puducherry    D) Lakshadweep islands

Q44. I have a tail and gills like a fish, I swim in water but I can jump and hop when I'll grow up.

Who am I?

- A) Maggot    B) Nymph    C) Caterpillar    D) Tadpole

Q45. Medicine in syringe is filled due to



- A) Liquid pressure    B) Piston pressure  
C) Air pressure    D) Needle pressure

**G.K (15 Marks)**

Q46. What is the maximum age limit for the post of the President of India?

- A) 58 years    B) 60 Years    C) 62 Years    D) There is no maximum age limit

Q47. Who can call a Joint session of the two houses of Parliament?

- A) President    B) Prime Minister    C) Lok Sabha Speaker    D) Chief Minister

Q48. Which Indian Prime Minister was the First to be awarded the Bharat Ratna Posthumously?

- A) Indira Gandhi    B) Lal Bahadur Shastri    C) Rajiv Gandhi    D) Morarji Desai

Q49. Who is the Urban Local Bodies Minister of Haryana?

- A) Sh. Anoop Dhanak    B) Sh. Devender Singh Babli  
C) Dr. Kamal Gupta    D) Sh. Sandeep Singh



- Q50. Who is the Development & Panchayats Minister of Haryana?**  
A) Sh. Moolchand Sharma                      B) Sh. Devender Singh Babli  
C) Sh. Sandeep Singh                          D) Dr. Kamal Gupta
- Q51. Who was the first winner of the Saraswati Samman?**  
A) Amrita Pritam                                B) Harivansh Rai Bachchan  
C) Mahasweta Devi                              D) Ramakant Rath
- Q52. In which year was the Dronacharya award instituted?**  
A) 1991    B) 1978    C) 1985    D) 1997
- Q53. Which of the following Governor of Haryana has the shortest tenure?**  
A) Babu Parmanad                                B) Om Prakash Verma  
C) Mahabir Prasad                                D) Dharma Vira
- Q54. Who is the first Indian Woman to become Miss Universe?**  
A) Sushmita Sen                                    B) Lara Dutta  
C) Harnaaz Kaur Sandhu                        D) Urvashi Rautela
- Q55. Who was the first batsman to score a double century in a one day international cricket?**  
A) Sourav Ganguly                                B) Rohit Sharma  
C) Virender Shewag                               D) Sachin Tendulkar
- Q56. Where has Prime Minister, Mr. Narendra Modi unveiled the Statue of Equality?**  
A) West Bengal                                    B) Telangana                                    C) Uttar Pradesh                                D) Maharashtra
- Q57. Which of the following state has become the only state in the country to have 5 International Airports?**  
A) Uttar Pradesh                                B) Rajasthan                                    C) Goa    D) Assam
- Q58. 'World No' Tobacco Day' is observed on which date?**  
A) 30 May    B) 29 May    C) 31 May    D) 28 May
- Q59. Which country has recently changed a word in its national anthem?**  
A) China    B) Australia                                      C) Nepal    D) Japan
- Q60. Who has been appointed as the new Director General of International Solar Alliance?**  
A) Ajay Mathur                                    B) Rahul Sachdeva                              C) Manoj Sinha                                    D) Sanjay Tyagi

**SPACE FOR ROUGH WORK**

# RPS - THE COMPLETE SCHOOL

## BEST IN HARYANA

IN CULTURAL

IN SPORTS

IN ACADEMICS




Highest Number of  
**Girls Qualifiers** in  
**NDA**  
Among Schools of India



in **World** Dancer Online  
International Dance Contest 2021  
to **Amishi Gautam**  
by Akhil Nalrajam Aantar sanskrutik  
Sangh, Nagpur



Sensational performance by  
**LAXIT**  
in the **ASIAN PARALYMPIC  
GAMES** (Bahrain)  
**Bronze Medal**  
(Javelin Throw)



Proudly Ranked Among the  
**TOP 10 Schools**  
in the Region by the Coveted

RPS International School  
Sec-50 Gurugram,  
**Rank-4** in Gurugram  
Challengers Category

RPS International School  
Sec-89 Gurugram,  
**Rank-5** in Gurugram  
Challengers Category

RPS International School  
Behror, Rajasthan,  
**Rank-7** among Top 10  
Boarding Schools of North India



**SANYAM BANSAL**  
IN **COMMERCE  
WIZARD-2021**  
by Institute of  
Chartered  
Accountants  
of India  
& won  
Prize of ₹ 1 Lakh



**RPS PUBLIC SCHOOL (HANSAKA)**  
**OVERALL CHAMPION**  
in Distt. Rewari in Bal Mahotsava 2021  
**9th Time in a Row**

**RPS SR. SEC. SCHOOL  
(MAHENDERGARH)** Claimed Distt. Narnaul  
**CHAMPION'S TROPHY**  
in Bal Mahotsava 2021, **12th Time in a Row**

**RPS PUBLIC SCHOOL  
(DHARUHERA)** stood proud as  
**First Runner Up**  
in Bal Mahotsava Rewari 2021

**RPS INTERNATIONAL SCHOOL  
(Sec-50, Gurugram)**  
**CHAMPION'S TROPHY**  
in Bal Mahotsava, Gurugram-2021

**SUPER**  
Achievements  
of **RPS**  
**GROUP OF**  
**SCHOOLS**

**40**  
STUDENTS  
**AIIMS**  
2021

**66**  
STUDENTS  
**NTSE-II**  
2022

**507**  
STUDENTS  
**NEET**

**441**  
STUDENTS  
**IIT-JEE**  
Main

**80**  
STUDENTS  
**IIT-JEE**  
Advanced

**15**  
STUDENTS  
**KVPY**

**110**  
STUDENTS  
**NDA**

**62**  
STUDENTS  
Securing 600  
marks & Above in  
**NEET**

**17**  
STUDENTS  
**CLAT**