



Where all the students get equal opportunity to show their brilliance and win amazing prizes!



OFFLINE EXAMINATION (PHASE –II)

CLASS-II

M.M. 40

TIME: 60 Minutes

Name : _____ Regn. No _____ Mobile No. _____

General Instructions:-

1. Duration of the examination is 60 Minutes. Question Paper contains 40 questions with maximum 40 marks.
2. **There will be negative marking in Phase -II i.e: $\frac{1}{4}$ mark will be deducted for each incorrect answer.**
3. Use of gadgets is not allowed.
4. Students must abide by the instructions issued during the examination by the invigilator or the centre incharge.
5. Before attempting the question paper ensure that it contains all pages & no question is missing.
6. Immediately fill the particulars on this page of the test booklet with blue/black ball point pen. Use of pencil is strictly prohibited.
7. Correct Method of filling the Boxes is given below.

Correct Method

Q. No.	Answer
1	A
2	D
3	C
4	B

Student's Signature

Invigilator's Signature

ALL INDIA RPS OLYMPIAD-2022

(Organized by RPS Education Society Mahendergarh-Haryana)

M.M. 40

Class- II

Time: 60 Minutes

ENGLISH (10 Marks)

Q1. Choose the correct proper nouns for the underlined common noun:-

‘The boys are playing in the park.’

- A) April and May B) Movie
C) Rohan, Sam and Ansh D) Park

Q2. Choose the sentence in which the underlined word is a verb:-

- A) A rabbit hops here and there.
B) He plays cricket.
C) It gives an answer.
D) Amit lives in Delhi.

Q3. Choose the preposition from the given sentence:-

‘The dog sat near the door.’

- A) sat B) dog C) near D) door

Q4. Choose the correct antonym of the following word:-

‘Blunt’

- A) Sharp B) Dull C) Hard D) Direct

Q5. Choose the correct synonym of the following word:-

‘Always’

- A) Never B) Forever C) Sometimes D) Leave

Q6. Arrange P,Q,R and S in order to make a meaningful sentence:-

P: eagle Q: the R: high S: flies

- A) QRSP B) SRQP C) QPSR D) PQRS

Q7. Choose the correct pronoun for the underlined words:-

‘Rani and Varun are playing chess.’

- A) Them B) They C) He D) You

Q8. Choose the correct articles for the following sentences:-

‘I ate _____ apple. _____ apple was sweet.’

- A) a,An B) an, The C) a, The D) the, The

Q9. Choose the word which is spelled correctly:-

- A) Sapatate B) Seperate C) Separate D) Seprate

Q10. Identify the predicate in the given sentence:-

The fox jumped over the wall.

- A) The fox B) The fox jumped C) Jumped over the wall D) the wall

MATHEMATICS (10 Marks)

Q11. Which of the following is greater than 26 tens + 5 ones?

- A) 205 B) 265 C) 256 D) 272

Q12. In a T20 match, Akshay scored 106 runs and Amit just managed to score 79 runs. How many runs are scored in their partnership?

- A) 181 runs B) 179 runs C) 185 runs D) 106 runs

Q13. 300 less than 6 hundreds and 6 ones is _____.

- A) 300 B) 306 C) 206 D) 366

Q14. Complete the number pattern.

865, 840 _____, 790, 765

- A) 855 B) 815 C) 760 D) 825

Q15. Harshita buys one chocolate ice-cream for ₹ 35.25 and one strawberry ice-cream for ₹ 25.75. She gives a ₹ 100 note to the ice-cream vendor. How much will he return to Harshita?

- A) ₹ 61 B) ₹ 39 C) ₹ 29 D) ₹ 41

Q16. The cost of a notebook is ₹ 45. What will be the cost of 15 such notebooks?

- A) ₹ 675 B) ₹ 515 C) ₹ 630 D) ₹ 60

Q17. I have 4 equal sides and 4 corners. I have slanting lines. Which shape am I?

- A) Square B) Rectangle C) Triangle D) Diamond

Q18. Rashmi bought a 80 litre container of oil. She used 64 litres 300 ml of it. How much oil is left?

- A) 15 L 300 ml B) 15 L 400 ml C) 15 L 700 ml D) 14 L 700 ml

Q19. When it is quarter to an hour, the minute hand is pointed at _____.

- A) 3 B) 6 C) 9 D) 12

Q20. Find the time shown in the clock.

- A) Quarter Past 9 B) Quarter Past 10
C) Quarter to 10 D) Half Past 9



EVS (10 Marks)

Q21. Which one of the following is a herbivore?

- A) Horse B) Lion C) Tiger D) Dog

Q22. Which of the following sentences is correct?

- A) Wheat and rice are pulses.
 B) Pea and gram are pulses.
 C) Pea and tomato are cereals.
 D) Mango has many seeds.

Q23. Select the correct match:-

- | | | |
|--------------------|---|--------|
| A) Synthetic fibre | – | Silk |
| B) Animal fibre | – | Jute |
| C) Natural fibre | – | Cotton |
| D) Plant fibre | - | Wool |

Q24. Which planet among the following has rings around it?

- A) Mercury B) Saturn C) Venus D) Earth

Q25. Which one of the following is a living machine?

- A) Washing machine B) Telephone C) Man D) Computer





Q26. Food like wheat, rice, and potato are rich in _____.

- A) fats B) vitamins C) proteins D) carbohydrates

Q27. Which of the following performs photosynthesis?

- A) Green plants B) Elephant C) Sparrow D) Man





Q28. Which one of the following animals is wild and carnivorous both?

A) 	B) 	C) 	D) 
Lion	Donkey	Horse	Dog

Q29. While driving the car, driver must wear_____.

- A) helmet B) jacket C) cap D) seat belt

Q30. Which one of the following is the nearest neighbour of the Earth?

A) 	B) 	C) 	D) 
MOON	SUN	URANUS	JUPITER

G.K (10 Marks)

- Q31. Which sports is Rafael Nadal associated with?**
A) Cricket B) Lawn Tennis C) Football D) Golf
- Q32. Who is the author of the book 'Race of My Life'?**
A) Milkha Singh B) Sachin Tendulkar C) Mahatma Gandhi D) Narendra Modi
- Q33. Which day is observed as 'World Earth Day'?**
A) 22 April B) 23 April C) 22 May D) 23 May
- Q34. What is the capital of France?**
A) London B) New York C) New Delhi D) Paris
- Q35. Choose the state where Dimapur Airport is located?**
A) Sikkim B) Nagaland C) Assam D) Arunachal Pradesh
- Q36. Which is the largest coffee- producing state of India?**
A) Kerala B) Tamil Nadu C) Karnataka D) Arunachal Pradesh
- Q37. How many players are there in a cricket team?**
A) 8 B) 9 C) 10 D) 11
- Q38. Which of the following gives green colour to plants?**
A) Carbohydrate B) Fat C) Chlorophyll D) Vitamin
- Q39. The study of the universe is known as _____.**
A) Astronomy B) Cosmology C) Geology D) Sicrotology
- Q40. Which animal has the best memory?**
A) Elephant B) Tortoise C) Dog D) Dolphin

SPACE FOR ROUGH WORK

RPS - THE COMPLETE SCHOOL

BEST IN HARYANA

IN CULTURAL

IN SPORTS

IN ACADEMICS




Highest Number of
Girls Qualifiers in
NDA
Among Schools of India



in **World** Dancer Online
International Dance Contest 2021
to **Amishi Gautam**
by Akhil Nalrajam Aantar sanskrutik
Sangh, Nagpur



Sensational performance by
LAXIT
in the **ASIAN PARALYMPIC
GAMES** (Bahrain)
Bronze Medal
(Javelin Throw)



Proudly Ranked Among the
TOP 10 Schools
in the Region by the Coveted

RPS International School
Sec-50 Gurugram,
Rank-4 in Gurugram
Challengers Category

RPS International School
Sec-89 Gurugram,
Rank-5 in Gurugram
Challengers Category

RPS International School
Behror, Rajasthan,
Rank-7 among Top 10
Boarding Schools of North India



SANYAM BANSAL
IN **COMMERCE
WIZARD-2021**
by Institute of
Chartered
Accountants
of India
& won
Prize of ₹ 1 Lakh



RPS PUBLIC SCHOOL (HANSAKA)
OVERALL CHAMPION
in Distt. Rewari in Bal Mahotsava 2021
9th Time in a Row

**RPS SR. SEC. SCHOOL
(MAHENDERGARH)** Claimed Distt. Narnaul
CHAMPION'S TROPHY
in Bal Mahotsava 2021, **12th Time in a Row**

**RPS PUBLIC SCHOOL
(DHARUHERA)** stood proud as
First Runner Up
in Bal Mahotsava Rewari 2021

**RPS INTERNATIONAL SCHOOL
(Sec-50, Gurugram)**
CHAMPION'S TROPHY
in Bal Mahotsava, Gurugram-2021

SUPER
Achievements
of **RPS**
GROUP OF
SCHOOLS

40
STUDENTS
AIIMS
2021

66
STUDENTS
NTSE-II
2022

507
STUDENTS
NEET

441
STUDENTS
IIT-JEE
Main

80
STUDENTS
IIT-JEE
Advanced

15
STUDENTS
KVPY

110
STUDENTS
NDA

62
STUDENTS
Securing 600
marks & Above in
NEET

17
STUDENTS
CLAT