



Where all the students get equal opportunity to show their brilliance and win amazing prizes!



OFFLINE EXAMINATION (PHASE –II)

CLASS-III

M.M. 60

TIME: 60 Minutes

Name : _____ Regn. No _____ Mobile No. _____

General Instructions:-

1. Duration of the examination is 60 Minutes. Question Paper contains 60 questions with maximum 60 marks.
2. **There will be negative marking in Phase -II i.e: $\frac{1}{4}$ mark will be deducted for each incorrect answer.**
3. Use of gadgets is not allowed.
4. Students must abide by the instructions issued during the examination by the invigilator or the centre incharge.
5. Before attempting the question paper ensure that it contains all pages & no question is missing.
6. Immediately fill the particulars on this page of the test booklet with blue/black ball point pen. Use of pencil is strictly prohibited.
7. Darken the bubbles completely. Do not put a tick or a cross . Fill the bubbles completely.
8. Half –filled or over-filled bubbles will not be read by the software & liable to be rejected.

Correct Method



Student's Signature

Wrong Method



Invigilator's Signature

ALL INDIA RPS OLYMPIAD-2022

(Organized by RPS Education Society Mahendergarh-Haryana)

M.M. 60

Class - III

Time: 60 Minutes

ENGLISH (15 Marks)

Q1. Choose the suitable pronoun for the underlined words in the sentence.

Riya, Soham and Mona are good friends.

- A) You B) They C) Us D) We

Q2. Choose the common gender from the following nouns:-

- A) Priest B) Professor C) Actress D) Monk

Q3. Pick the appropriate preposition to complete the following sentence.

Suddenly the thieves broke _____ my house.

- A) in B) on C) into D) with

Q4. Choose the feminine gender for the given word.

‘Buck’

- A) Hind B) Ewe C) Doe D) Hen

Q5. Choose the correct set of articles to fill in the blanks.

Ankit wanted to ride _____ elephant in _____ fair.

- A) the, the B) an, an C) an, the D) a, a

Q6. Choose the suitable adjective to fill in the blank.

Sana has brought two pens, and _____ pen is black.

- A) many B) each C) both A & B D) all of these

Q7. Demonstrative adjectives are used to:

- A) ask question B) point something or someone
C) show quality D) show quantity

Q8. Choose the appropriate conjunction for the blank in the given sentence.

She must run fast, _____ she will lose the race.

- A) and B) but C) or D) so

Q9. Pick the correct form of adjective to complete the sentence.

My sister is not as _____ as Rakshita.

- A) Wiser B) wise C) wisest D) none of these

Q10. Select the correct option having meaningful sentence with the given words.

The hungry lion sprang _____ the deer.

- A) at B) in C) with D) upon

Q11. Make meaningful sentence with the given jumbled words.

friends/visiting/ next month/ are/my/ us

- A) My friends visiting my are next month.
B) My friends are visiting us next month.
C) My friends are next month us visiting.
D) My friends visiting are us next month.

Q12. Find the correct article to complete the sentence.

She married to _____ European man.

- A) the B) an C) a D) none of the above

Q13. Choose the kind of noun for underlined word:-

She showed her patriotism in the act.

- A) Common B) Proper C) Abstract D) None of the above

Q14. Select the appropriate pronoun for the blank.

Rohan and Vinit blamed _____ for the accident.

- A) itself B) themselves C) himself D) ourselves

Q15. Fill in the blank with suitable conjunction.

Vansh came late _____ he missed the tasty treat.

- A) and B) but C) so D) or

MATHEMATICS (15 Marks)

Q16. If pair of scissor cost ₹ 75, how many coins of 50 paise do you need to buy it?

- A) 25 B) 150 C) 100 D) 125

Q17. On 1st November, there were 1275 tourists in Kerela. On 2nd November, 983 more tourists came in and 1163 left for Goa. How many tourists were there in Kerela on 2nd November?

- A) 1195 B) 2095 C) 1095 D) 2258

Q18. How many pieces of electric wires measuring 30 cm each can cut from a 27 m long electric wire?

- A) 36 B) 45 C) 90 D) 180

Q19. Find the next two missing numbers in the given number pattern.

100, 92, 84, 76, ?, ?

- A) 60, 56 B) 64, 56 C) 62, 54 D) 68, 60

Q20. If $\frac{28}{42} = \frac{a}{3}$, where 'a' stands for numerator, then the value of 'a' is:

- A) 4 B) 3 C) 2 D) 1

Q21. Product of 11 and 6 is divided by their difference. The remainder will be:

- A) 0 B) 1 C) 2 D) 3

Q22. Find the value of P + Q + R + S

$$\begin{array}{r}
 \begin{array}{r}
 6 \qquad \qquad 7 \qquad 5 \\
 \times \qquad \qquad 1 \qquad 5 \\
 \hline
 3 \quad 3 \quad \boxed{P} \quad 5 \\
 + \quad \boxed{Q} \quad 7 \quad 5 \quad 0 \\
 \hline
 \boxed{R} \quad 0 \quad 1 \quad \boxed{S} \quad 5
 \end{array}
 \end{array}$$

- A) 12 B) 15 C) 18 D) 16

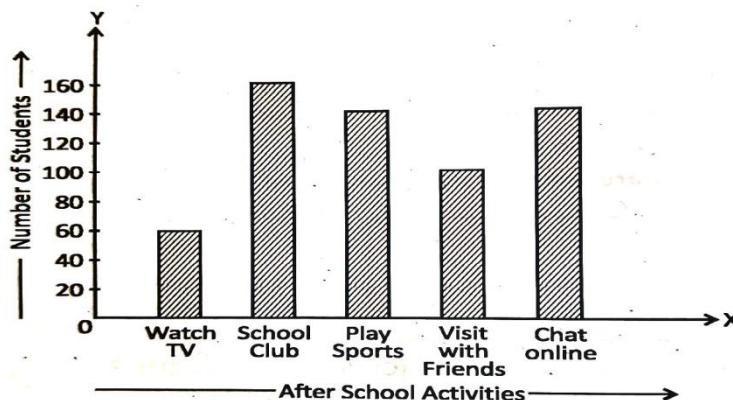
Q23. Nirali walked for 40 minutes on Monday morning. If She increases her walking time by 5 minutes every day, then on coming Saturday She will walk for _____.

- A) 1 hr. 5 mins B) 45 mins C) 1 hour D) 55 mins

Q24. The value of \triangle is 3 times as much as the value of \bigcirc . What is the value of $\triangle + \bigcirc$ if $\bigcirc + 14$ is 24?

- A) 30 B) 40 C) 38 D) 42

Q25. The given bar graph represents the favorite after – school activities of students.



How many more students chat online than watched TV?

- A) 100 B) 40 C) 60 D) 80

Q26. What fraction is 5 days of two weeks?

A) $\frac{3}{14}$

B) $\frac{5}{14}$

C) $\frac{1}{7}$

D) $\frac{2}{7}$

Q27. A number, when subtracted from 7000, leaves a difference of 2639. What is the number?

A) 5471

B) 5361

C) 4361

D) 3639

Q28. How many wheels are there on a dozen tricycles?

A) 12

B) 32

C) 36

D) 24

Q29. Total rotation of second hand of a watch in 2 hr 30 minutes will be:

A) 90

B) 60

C) 120

D) 150

Q30. A train starts everyday at 7:05 AM from New Delhi Railway Station and reaches the Howrah Railway Station at 6:40 PM. How much time does it take to reach Howrah Railway Station?

A) 1 hour 55 minutes

B) 11 hours 55 minutes

C) 11 hours 35 minutes

D) 1 hour 45 minutes

EVS (15 Marks)

Q31. Which fuel is used in this stove?



A) Coal

B) Sunlight

C) LPG

D) Kerosene

Q32. Activities such as painting, clay modelling and origami are called _____

A) performing arts

B) creative arts

C) objective arts

D) plastic arts

Q33. Select the incorrect option:-

A) Wild animals - live in jungle

B) Aquatic animals - live on land

C) Milch animals - give milk

D) Poultry animals - give egg

Q34. The crisscross laying of yarns tightly using weaving machines or knitting rods is called _____.

A) ginning

B) knitting

C) stitching

D) spinning

Q35. Phulkari is the folk embroidery of which state?


A) Punjab

B) Rajasthan

C) Odisha

D) Haryana

Q36. What will happen if the number of snakes in the food chain shown below is decreased?



- A) The number of frogs will decrease.
- B) The number of grasshoppers will increase.
- C) The number of grasshoppers will not change.
- D) The number of frogs will increase.

Q37. A sunflower always turns towards the Sun. This shows that:

- A) Plants show movement.
- B) Plants do not grow.
- C) Plants are non living things.
- D) Plants do not breathe.

Q38. Which of the following changes weather?

- A) The earth
- B) Human being
- C) The sun
- D) Television

Q39. If we put ice cubes on a table in our house, after sometime it becomes water. What is the process in this change?

- A) Freezing
- B) Boiling
- C) Melting
- D) Evaporation

Q40. The process of cooking food in hot ghee or oil is called _____.

- A) boiling
- B) frying
- C) steaming
- D) baking

Q41. Judo, Karate, and Taekwondo are played on a _____.

- A) board
- B) ring
- C) rink
- D) mat

Q42. What do we call a person who reports news on TV, radio or Newspaper?

- A) Journalist
- B) Teacher
- C) Manager
- D) Business person

Q43. Which of the following is an omnivore?

A)



Elephant

B)



Horse

C)



Giraffe

D)



Bear

Q44. Which of the following activities requires air?

- A) Movement of fingers
- B) Burning of wood
- C) Building a house
- D) Throwing a stone

Q45. When we boil water in a kettle, water vapours come out of the kettle. Water Vapour is the _____ form of water.

- A) solid
- B) liquid
- C) gaseous
- D) none of these

G.K (15 Marks)

- Q46. 'Kip' is the currency of which country?**
A) Haiti B) Laos C) Honduras D) Hungary
- Q47. 'Rouf' is the dance form of which state?**
A) Himachal Pradesh B) Jammu & Kashmir
C) Punjab D) Haryana
- Q48. 'Yakshagana' is the dance form of which state?**
A) Kerala B) Tamil Nadu C) Karnataka D) Andhra Pradesh
- Q49. Which is the longest human made structure in the World?**
A) The Great Wall of China B) Chichen Itza
C) Petra D) Machu Picchu
- Q50. What is the capital of Kerala?**
A) Ernakulam B) Cochin C) Calicut D) Thiruvananthapuram
- Q51. Who invented the video –tape?**
A) Richard James B) Charles Ginsberg
C) P.T. Farnsworth D) Georges de Mestral
- Q52. Who invented vaccination for 'Small Pox'?**
A) Sir Fredrick Grant Banting B) Sir Alexander Fleming
C) Edward Jenner D) Louis Pasteur
- Q53. The path of planets revolving around the sun is called _____**
A) Orbit B) Spherical C) Circle D) None of these
- Q54. Our solar system is a part of which galaxy?**
A) Andromeda B) Milky way C) Bode's D) Triangulum
- Q55. What is the currency of Denmark?**
A) Krone B) Koruna C) Krona D) Kuna
- Q56. 'World Braille Day' is observed on which date?**
A) March 5 B) January 4 C) April 8 D) January 8
- Q57. In which city 33rd Summer Olympics will be held in 2024?**
A) Paris B) Los Angeles C) Brisbane D) Sydney
- Q58. Which space agency will send a 'VIPER' rover to find resources on the moon?**
A) ISRO B) NASA C) CNSA D) JAXA
- Q59. Choose the name of the channel which was launched in May 2021.**
A) DD Bharat B) DD India C) DD Krishak D) DD International
- Q60. Which Indian state has won the Syed Mushtaq Ali Trophy?**
A) Tamil Nadu B) Haryana C) Punjab D) Goa

SPACE FOR ROUGH WORK

RPS - THE COMPLETE SCHOOL

BEST IN HARYANA

IN CULTURAL

IN SPORTS

IN ACADEMICS




Highest Number of
Girls Qualifiers in
NDA
Among Schools of India



in **World** Dancer Online
International Dance Contest 2021
to **Amishi Gautam**
by Akhil Nalrajam Aantar sanskrulik
Sangh, Nagpur



Sensational performance by
LAXIT
in the **ASIAN PARALYMPIC
GAMES** (Bahrain)
Bronze Medal
(Javelin Throw)



Proudly Ranked Among the
TOP 10 Schools
in the Region by the Coveted

RPS International School
Sec-50 Gurugram,
Rank-4 in Gurugram
Challengers Category

RPS International School
Sec-89 Gurugram,
Rank-5 in Gurugram
Challengers Category

RPS International School
Behror, Rajasthan,
Rank-7 among Top 10
Boarding Schools of North India



SANYAM BANSAL
IN **COMMERCE
WIZARD-2021**
by Institute of
Chartered
Accountants
of India
& won
Prize of ₹ 1 Lakh



RPS PUBLIC SCHOOL (HANSAKA)
OVERALL CHAMPION
in Distt. Rewari in Bal Mahotsava 2021
9th Time in a Row

**RPS SR. SEC. SCHOOL
(MAHENDERGARH)** Claimed Distt. Narnaul
CHAMPION'S TROPHY
in Bal Mahotsava 2021, **12th Time in a Row**

**RPS PUBLIC SCHOOL
(DHARUHERA)** stood proud as
First Runner Up
in Bal Mahotsava Rewari 2021

**RPS INTERNATIONAL SCHOOL
(Sec-50, Gurugram)**
CHAMPION'S TROPHY
in Bal Mahotsava, Gurugram-2021

SUPER
Achievements
of **RPS**
GROUP OF
SCHOOLS

40
STUDENTS
AIIMS
2021

66
STUDENTS
NTSE-II
2022

507
STUDENTS
NEET

441
STUDENTS
IIT-JEE
Main

80
STUDENTS
IIT-JEE
Advanced

15
STUDENTS
KVPY

110
STUDENTS
NDA

62
STUDENTS
Securing 600
marks & Above in
NEET

17
STUDENTS
CLAT