



6th All India RPS

OLYMPIAD

2024-25



QUESTION PAPER

M.M:40

Time: 60 minutes

OFFLINE EXAMINATION (PHASE-II)

CLASS - II

Name: _____ **Reg. No.** _____ **Mobile No.** _____

General Instructions:

1. Duration of the examination is 60 minutes. Question Paper contains 40 questions with maximum 40 marks.
2. There will be negative marking in Phase – II, i.e. $\frac{1}{4}$ mark will be deducted for each incorrect answer.
3. Use of gadgets is not allowed.
4. Students must abide by the instructions issued during the examination by the invigilator or the centre incharge.
5. Before attempting the question paper ensure that it contains all pages & no question is missing.
6. Immediately fill in the particulars on this page of the test booklet.
7. Students must use Black ball point pen to write the correct option in capital letter. For example like 'A' is the correct option, so the student will only write 'A' in the given box.
8. Writing the answer outside the box will not be accepted/considered.
9. Do not write the option in cursive.
10. Use of pencil is strictly prohibited.

Correct Method

A

Student's Signature

Wrong Method

a **A** **B** **C**

Invigilator's Signature

SPACE FOR ROUGH WORK

ENGLISH (10 Marks)

Choose the correct option:

Q1. Identify the common nouns and proper nouns in the following sentence:

Raja Man Singh I, the Maharaja of Kingdom of Amber, built the Amber fort in Jaipur.

- A. **Common Nouns:** Raja Man Singh I, Jaipur; **Proper Nouns:** Maharaja, Amber, fort.
 B. **Common Nouns:** Maharaja, Kingdom; **Proper Nouns:** Raja Man Singh I, Jaipur.
 C. **Common Nouns:** Raja Man Singh I, fort; **Proper Nouns:** Maharaja, Jaipur.
 D. **Common Nouns:** Maharaja, Amber; **Proper Nouns:** Raja Man Singh I, Kingdom.

Q2. Choose a suitable pronoun to complete the following sentence:

My trousers are old. I have worn _____ for a long time.

- A. him B. them C. her D. it

Q3. Complete the following sentence choosing the suitable articles:

She found ___ one-rupee coin on ___ floor.

- A. a, the B. an, a C. a, an D. the, the

Q4. Which of the following is the feminine gender of 'duke'?

- A. duken B. duchess C. duke D. drake

Q5. Choose the verb from the sentence given below:

My mother baked a delicious cake for my birthday.

- A. mother B. delicious C. baked D. birthday

Q6. Complete the following sentence by choosing a suitable helping verb:

The students _____ shouting in the classroom.

- A. were B. is C. am D. was

Q7. Identify the adjective/es in the following sentence:

The brown fox jumped over the lazy dog.

- A. brown B. lazy C. over D. both A & B.

Q8. Choose the most suitable form of verb given in the bracket:

The birds _____ _____ in the sky. (fly)

- A. is flying B. are flying C. are fly D. none of these

Q9. Identify the correctly punctuated sentence:

i am going to dubai to visit my friend maria.

- A. I am going to Dubai to visit my friend maria
 B. I am going to Dubai to visit my friend maria.
 C. I am going to Dubai to visit my Friend Maria,
 D. I am going to Dubai to visit my friend Maria.

Q10. Which of the following is the plural noun of 'ox'?

- A. oxes B. oxs C. oxies D. oxen

MATHEMATICS (10 Marks)

Q11. I am a geometrical figure with six faces and eight corners. Who am I?

- A. Square B. Cuboid C. Cylinder D. Rectangle

Q12. 4 hundreds 8 tens 3 ones + 7 hundreds 3 ones + 2 tens 2 ones = _____

- A. 1124 B. 789 C. 1208 D. 900

Q13. If you subtract the smallest odd number from the largest 3-digit odd number, you get _____.

- A. 998 B. 1000 C. 99 D. 9

Q14. Which number should replace ☆ to make the following statement true?

$$18 \text{ tens} + \star = 98 \text{ tens}$$






- A. 23 tens B. 61 tens C. 80 tens D. 20 tens

Q15. While arranging the given numbers in ascending order which number will be the third from the beginning?

432, 506, 177, 348, 208

- A. 177 B. 208 C. 348 D. 506

Q16. The data given below represents the number of people who travelled in the given mode of transport.

Modes of Transport	Number of People
Bus	
Car	
Bike	
Scooter	
Cycle	

Now answer the question given below:

If  = 8 people, then how many people used bike as the means of transport?

- A. 32 B. 28 C. 24 D. 48

Q17. If D stands for 10, O stands for 15 and L stands for 5 then what is the cost of DOLL?

- A. ₹ 20 B. ₹ 30 C. ₹ 35 D. ₹ 45

Q18. What will come next in the given pattern?

85, 67, 49, 31, _____

- A. 26 B. 15 C. 10 D. 13

Q19. 5 minutes = _____seconds.

- A. 200 seconds B. 240 seconds
C. 300 seconds D. 100 seconds

Q20. A pack of pens contains 38 pens. How many pens are there in 8 such packs?

- A. 140 B. 304 C. 150 D. 240

EVS (10 Marks)

Q21. What happens to the size of the lungs when we breathe in?

- A. increase B. decrease C. remain same D. none of these

Q22. What do we call the part of the foot on which we stand?

- A. toe B. heal C. sole D. all of these

Q23. Nowadays people build green buildings using _____.

- A. natural material B. waste material
C. both A and B D. none of these

Q24. Which of the following is high in fibre and helps in digestion?

- A. bread B. rice
C. fruits & vegetables D. meat

Q25. Who among the following leads the prayers in a church?

- A. Pandit B. Priest C. Imam D. Granthi

Q26. In our neighbourhood, people do various kinds of work. Rajesh makes things from iron. What do we call him?

- A. Carpenter B. Blacksmith C. Cobbler D. Plumber

Q27. _____ is the harvest festival celebrated in the southern state of Kerala.

- A. Bihu B. Onam C. Pongal D. Navratri

Q28. The long kurta worn by the Kashmiris is called _____.

- A. shervani B. pheran C. kimono D. uniform

Q29. Which of the following is not a part of the fire engine?

- A. ladder B. siren C. water pipe D. saw

Q30. The movement of air from one place to another is called _____.

- A. precipitation B. fog C. wind D. smog

G.K (10 Marks)

Q31. Who among the following was the first female Prime Minister of India?

- A. Mrs. Pratibha Patil B. Mrs. Draupadi Murmu
C. Mrs. Indira Gandhi D. None of these

Q32. Who among the following designed the Indian National flag?

- A. Mr. Rabindranath Tagore B. Mr. Pingali Venkayya
C. Mr. Praduman Das D. None of these

Q33. Grains are _____ of plants.

- A. roots B. seeds C. flowers D. leaves

Q34. Which of the following is the second highest peak in India which is situated in Uttarakhand?

- A. Mt. Everest B. Kanchenjunga C. Mt K2 D. Nanda Devi

Q35. Who among the following is the famous Indian cricketer known as ‘Master Blaster’?

- A. Sachin Tendulkar B. Virat Kohli C. M.S. Dhoni D. Rohit Sharma

Q36. Which of the following planets has the shortest revolution period?

- A. Saturn B. Earth C. Mercury D. Jupiter

Q37. Who among the following designs and oversees the construction of buildings?

- A. Architect B. Painter C. Surveyor D. Contractor

Q38. Which of the following is the largest mammal in the ocean?

- A. Jelly fish B. Octopus C. Blue Whale D. Sea horse

Q39. Which of the following is a body of land that is surrounded by water on three sides?

- A. Peninsula B. Island C. Ocean D. Mountain

Q40. Which of the following indoor games is known as the ‘The King of Board Games’ and involves capturing the opponent’s pieces?

- A. Ludo B. Chess C. Carrom D. Checkers

SPACE FOR ROUGH WORK

RPS GROUP OF SCHOOLS
Under the aegis of RPS Education Society, M/Garh



Gold Medal
UGANDA PARA BADMINTON CHAMPIONSHIP



KARTIK SUHAG (Grade IX)

Bronze Medal
HYDROPLUS INDONESIA PARA BADMINTON INTERNATIONAL CHAMPIONSHIP 2024

International Science Olympiad
Rank-1
Earned a Trip to **NASA, USA**



PRANAV
GRADE VII

715
720

NEET-2024



VMMC New Delhi

RITESH SHARMA
S/o Mr. JAI PRAKASH & Ms. SAMMAT KUMARI



1st
YOUNGEST CROREPATI
IN KAUN BANEGA
CROREPATI



MAYANK,
A PROUD RPSIAN

JEE Advanced
-2024



IIT BOMBAY
COMPUTER SCIENCES



ANUP YADAV

S/o Mr. NARESH KUMAR & Ms. KAMLESH

IJSO-2024

BHAVYAA GUNWAL

D/o Dr. SUMAN YADAV & Dr. ANIL YADAV
(Ateli-Narnaul)

THE FIRST EVER STUDENT
of the Region

SELECTED IN TEAM INDIA
for

**INTERNATIONAL JUNIOR
SCIENCE OLYMPIAD**
to be held in
BUCHAREST, ROMANIA

International Dancers

CHIRANSHI

D/o Mr. Bhavneet Kumar

LAVANYA

D/o Late Mr. Sanjay Kumar

1st Prize Under 14

IIGF DANCE COMPETITION
KUALA LUMPUR, MALAYSIA



Won **2nd Position**

(Silver Medal)

EVENT: KUDO EURASIAN CUP, 2024

Under-13, Female Category, at Yerevan, Armenia.



Vrinda Soni
Class - VII (The Satluj)

**Ensuring 360° Approach
Towards Holistic Development**

Our Campuses: Mahendergarh Ph.:01285-222645, 9416150201 | Rewari Ph.:8222000359 | Rewari City Ph.:9053555526 | Dharuhera Ph.:9467064534
Kosli Ph.:9255148141 | Behror Ph.:9529678004 | Hansi Ph.:9813196969, 9896100407 | Narnaul Ph.: 8198976666 | Hisar Ph.:8307760465
Gurugram Sec- 50 Ph.:8409989898, 7827466258 | Gurugram Sec- 89 Ph.:8222999182 | Karnal Ph.:8398000304/06 | Rohtak Ph.: 7419998800
Dadri Ph.: 8222048283, 84 | Rosewood City, Gurugram : Ph.: 70424 96986 | Kanina Ph.: 7056743636 | Dharuhera -2 Ph.: 9467064534

Web.: www.rpsgroup.edu.in

Top-Notch Hostel Accommodation for Boys and Girls at M/GARH, KANINA, BEHROR, KOSLI & HANSI CAMPUSES