



RPS
GROUP OF SCHOOLS



RPS OLYMPIAD 2023-24 (Phase – I)
GRADE:- I

M.M.:-40

ENGLISH (10 Marks)

Fill in the blank with the correct option

Q.1 There is ___ aeroplane flying high in the sky.

- (a) the (b) an (c) a (d) Both a and b.

Directions (Q2 and Q3) Rearrange the jumbled words to make meaningful sentence.

Q.2 My red bike like I.

- (a) Red bike like I my (b) I like my red bike.
(c) Bike I like my red. (d) None of these

Q.3 Picture book your is interesting very.

- (a) Book is very interesting picture your
(b) Interesting picture book is your very
(c) Your picture book is very interesting.
(d) All of these

Choose the correct pronoun for the underlined words in the sentence given below.

Q.4 Nitin and I had breakfast.

- (a) I (b) He (c) They (d) We

Find the common noun.

Q.5 Mumbai is a big city.

- (a) Mumbai (b) City (c) Big (d) All of these

Identify the verb in the following sentence.

Q.6 Rohit finished his homework.

- (a) finished (b) Rohit (c) homework (d) Both a and b

Q.7 _____ are beautiful stars.



- (a) This (b) Those (c) These (d) That

Q.8  _____ is a circle.

- (a) Those (b) These (c) That (d) This

Choose the proper noun.

Q.9 Rohit loves to eat mango.

- (a) Loves (b) Mango (c) Rohit (d) Eat

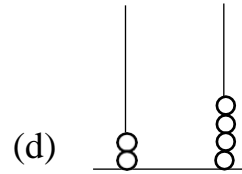
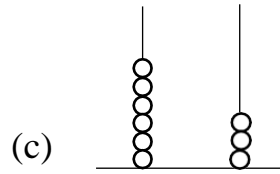
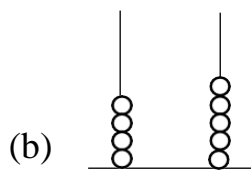
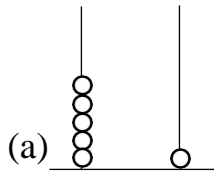
Q.10 Which of the following is a correct pronoun for the words 'The dog' in the sentence given below.

The dog ran behind the car.

- (a) He (b) It (c) We (d) They

MATHEMATICS (10 Marks)

Q.11 Which abacus shows the sum of $15+9=?$



Q.12 Starting from 35 and jumping 8 steps forward, you will reach _____.

- (a) 41 (b) 42 (c) 43 (d) 44

Q.13 Which of the following numbers is 10 less than 100?

- (a) 90 (b) 40 (c) 50 (d) 80

Q.14 6 birds are sitting on a tree. Out of them 2 birds fly away. Now how many birds are left on the tree?

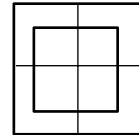
- (a) $6-6=0$ (b) $6-2=4$ (c) $6+2=8$ (d) $6+6=12$

Q.15 A plane shape having 3 corners is called as a _____.


- (a) Triangle (b) Rectangle (c) Square (d) Circle

Q.16 How many squares are there in the given figure?

- (a) 8 (b) 9
(c) 10 (d) 11



Look at this picture and answer the questions given below: -



Q.17 How many stars are there?

- (a) 5 (b) 7 (c) 9 (d) 11

Q.18 Which of the following is the least in number?

- (a)  (b)  (c)  (d) 

Q.19 Which of the following is the number name of 72?

- (a) Seventy two (b) Seven two (c) Seven zero two (d) Seventy twelve

Q.20 Show : Thirty is greater than nine.

- (a) $30 > 9$ (b) $30 < 9$ (c) $30 = 9$ (d) $9 - 30$

EVS (10 Marks)

Q.21 We should keep our books and clothes in their _____ place.

- (a) right (b) dirty (c) wrong (d) none of these

Q.22 A _____ is a group of people who are related to one another like parents, grandparents, uncle, aunt and children.

(a) band (b) choir (c) troop (d) family

Q.23 We get fruits, vegetables, nuts and _____ from plants.

(a) pulses (b) egg (c) fish (d) meat

Q.24 We have _____ main meals in a day.

(a) four (b) one (c) three (d) two

Q.25 _____ is the main source of water.

(a) Hand pump (b) River (c) Rain (d) Shower

Q.26 We get _____ from sheep.

(a) cotton (b) raincoat (c) wool (d) none of these

Q.27 We wear woollen clothes in _____.

(a) winter (b) summer (c) monsoon (d) none of these

Q.28 We cook our food in the _____.

(a) kitchen (b) bathroom (c) bedroom (d) none of these

Q.29 We walk, run and exercise in this place.

(a) park (b) market (c) bus stop (d) railway station

Q.30 Which of these places do we visit when we are sick or injured?

(a) school (b) market (c) hospital (d) park

GK (10 Marks)

Q.31 Who is the first Asian athlete to win an Olympic gold medal in the men's Javelin throw?

(a) PV Sindhu (b) Neeraj Chopra (c) Sunil Chhetri (d) Virat Kohli

Q.32 Who among the following is one of the famous chess players of India?

(a) Rahul Dravid (b) Viswanathan Anand

(c) Sachin Tendulkar (d) Major Dhyhan Chand

Q.33 Which of these sports do you play with a shuttle cock?

(a) Cricket (b) Hockey (c) Badminton (d) Table-tennis

Q.34 Which of the following objects can sink in water?

(a) wood (b) ice (c) pencil (d) spoon

Q.35 What is the taste of an ice-cream?

(a) sweet (b) sour (c) salty (d) bitter

Q.36 Which of the following is a water transport?

- (a) ship (b) car (c) bus (d) train

Q.37 Which of the following is the tallest brick tower of India?

- (a) Taj Mahal (b) India Gate (c) Qutub Minar (d) Red Fort

Q.38 Who among the following go to a temple for praying?

- (a) Sikhs (b) Muslims (c) Hindus (d) Christians

Q.39 Which of the following is the currency of India?

- (a) Rupee (b) Dollar (c) Pound (d) Ruble

Q.40 Which of the following is the national animal of India?

- (a) Lion (b) Tiger (c) Elephant (d) Bear